



WALT read the time to half an hour


1) Can you match the times to the clocks?



Half past twelve



Half past 2



Half past nine

2) Can you fill in the missing units of time?

Half an hour before



Half an hour after

Half past ____

Half past ____

Half past ____

Half an hour before



Half an hour after

Half past ____

Half past ____

Half past ____

3) Where will the hour hand be at half past 5?

4) Where will the minute hand be at half past 5?

5) Can you spot Amir's mistake?



The time is 6 past 1

Tommy

Can you spot Tommy's mistake?
