



WALT Tell time to the nearest minute to the hour

3) Underneath each clock, write the time shown.

a)



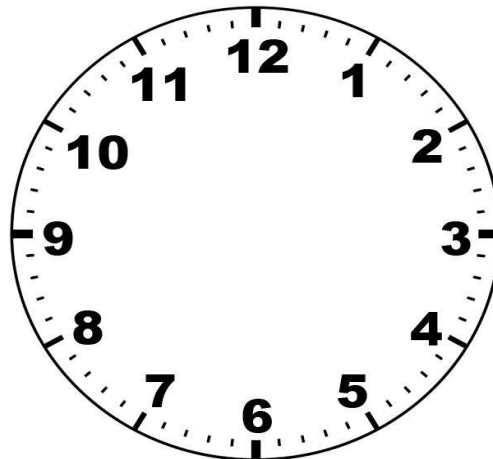
b)



c)



Class assembly started at 10 minutes to 10. It lasted for 15 minutes. At what time did it end? Draw the minute and hour hands on the clock to show the time it finished. Can you also write the time in words?



Ben says that the time on the clock is 35 minutes to 3. Is he correct?

What should he say the time is instead?

Explain your answer.

