


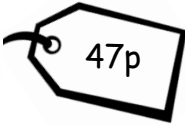




WALT find different ways to make an amount


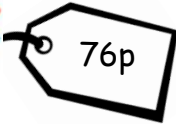




For each item there are 4 different ways to pay. Some are correct and some are incorrect.

Add up the total amount of coins in each box and write your answer in the box.

If the total is correct, put a tick in the box.



If the total is incorrect, put a cross in the box.

 	
 <input data-bbox="609 846 785 947" type="text"/>	 <input data-bbox="1254 846 1430 947" type="text"/>
 <input data-bbox="612 1126 788 1227" type="text"/>	 <input data-bbox="1257 1126 1433 1227" type="text"/>



 	
 <input data-bbox="609 1697 785 1798" type="text"/>	 <input data-bbox="1254 1697 1430 1798" type="text"/>
 <input data-bbox="612 1973 788 2074" type="text"/>	 <input data-bbox="1257 1973 1433 2074" type="text"/>

For each item I haven't got enough money.

Count up how much money I do have. Then draw which coins I could use to make my money equal the correct amount.

 15p	
--	---

 37p	
--	---

 64p	
---	--

 99p	
--	---

Challenge – 2 step problem

Here is my purse.
Sheena has 30p more than me in her purse.

Sheena can share her money equally
Between us.
True or False?
Prove it.

